




Name: \_\_\_\_\_


Date: \_\_\_\_\_

## 2D Shapes (2)

Can you name each of the 2D shapes?



① \_\_\_\_\_



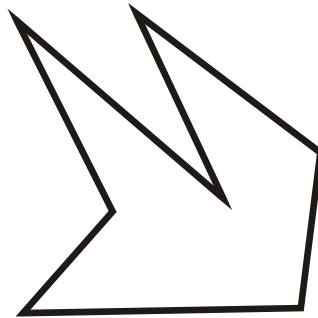
② \_\_\_\_\_




③ \_\_\_\_\_




④ \_\_\_\_\_



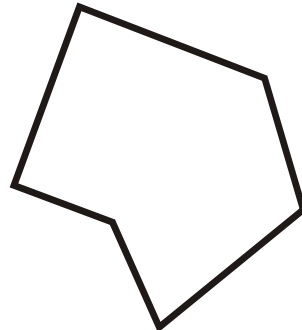
⑤ \_\_\_\_\_



⑥ \_\_\_\_\_



⑦ \_\_\_\_\_



⑧ \_\_\_\_\_